



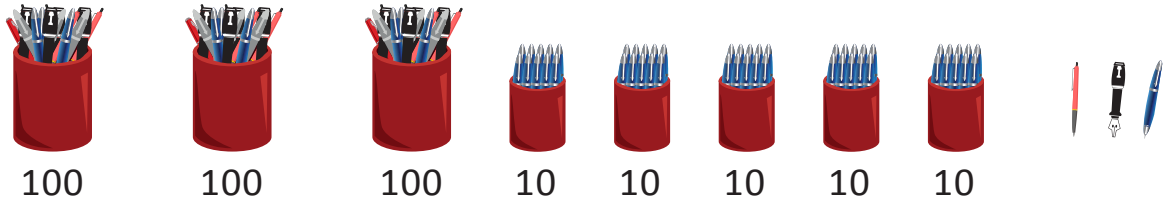
NAME _____

DATE _____

BUNDLE AND COUNT

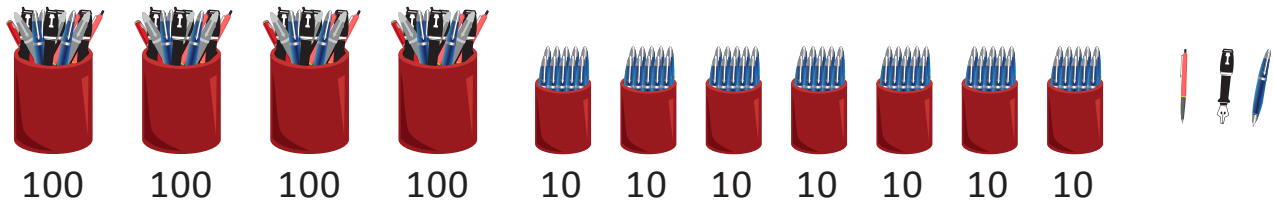
Count the objects in bundles by using ones, tens and hundreds.

1. a) At the pen centre the shop keeper placed pens in the cup boards in bundles of hundreds, tens and ones as follows.



How many pens does shopkeeper have? ____.

1. b) Draw 1 more hundred and 2 more tens. Count and write how many pens that the shopkeeper has now?




The shopkeeper has now ____ pens.

2. a) Rhona put her stickers in the jar hundreds, tens and ones in small tins. Count and write how many stickers that Rhona has now?



Number of stickers that Rhona has ____.

2. b) Draw 1 more hundred and one more ten and two more ones. Count and write how many stickers that Rhona has now?



Rhona has now ____ stickers.